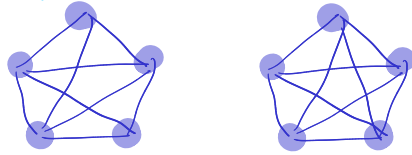
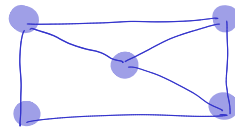


Can you draw these pictures, without ever crossing your path?

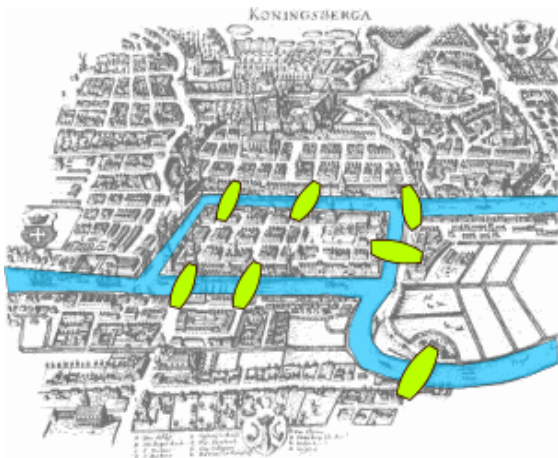


Can you draw this picture without ever lifting your pencil?



These are children problems, but also real-life problems in graph theory, namely to know whether a graph is planar, or similar to know if a graph is Eulerian.

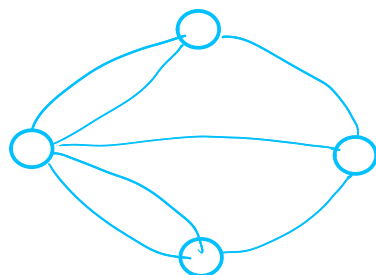
The first problem: Seven bridges of Königsberg (Euler, 1736)



Euler was wondering if one can go from one place in the Königsberg area, and back to that original place, by taking every bridge exactly once.

(This is considered to be the first solved problem in graph theory).

A modelisation of the problem:



This graph model the areas of the city. There is no need to know the exact location of each bridge.

Remarks:

- Since we have to go back where we started, we do not care where we start.
- Everytime we go from a location to another and back, we cross 2 bridges adjacent to that location.

Since every island has an odd number of bridges, it is not possible to visit all the islands by taking every bridge exactly once. (2)


Some definitions

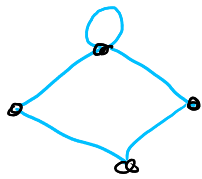
A graph G is made of a set of vertices (modeling some objects), and a set of relations between two vertices, called the edges. We denote $G = (V, E)$ for the graph with vertices V and edges E . Any edge is a pair of two vertices called the endpoints.

We draw a graph (on paper or on the computer) by representing the vertices as points, and we draw a curve between two vertices if they are endpoints of the same edge. We can draw differently the same graph.

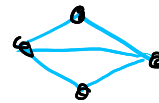
Example



A loop is an edge whose endpoints are the same vertex. 
Multiple edges are edges having the same pair of endpoints.
A simple graph is a graph having no loop nor multiple edges.



Not simple graphs



Simple graph

When uv (or equivalently) vu is an edge, we say the vertices u and v are adjacent, or that they are neighbors.

Subgraphs and containment

A graph $G' = (V', E')$ is a subgraph of $G = (V, E)$ if $V' \subseteq V$ and $E' \subseteq E$. We then say that G' is contained in G , denoted $G' \subseteq G$.

Example

Every graph with n vertices is a subgraph of the complete graph with $m \geq n$ vertices.


A graph is connected if, for every pair of vertices, there is a path (i.e. a sequence of edges) between them that belongs to the graph. It is otherwise disconnected.

Some important problems in graph theory

1. Acquaintances

Do every set of six people contain at least three mutual acquaintances or three mutual strangers?

That question can be represented using a graph. Every person is a vertex, and there is an edge between two persons if they know each other. Here, we assume knowing each other is a mutual relation, i.e. knowing a celebrity usually does not count.



Two graphs. The first one is a 5-vertex graph with no three mutual strangers, nor three acquaintances.

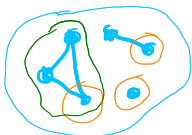
As a homework, you will have to prove your solution to this statement.

The second one has six vertices, and contain both three mutual strangers and three acquaintances (a clique).

Some useful vocabulary:

A clique in a graph is a set of pairwise adjacent vertices, i.e. a complete subgraph.

An independent set is a subset of vertices with no adjacent pairs.



• A clique

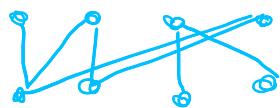
• An independent set

2. Job assignments

If there are m jobs and n people, not all qualified for all the jobs, is there a way we can fill all the jobs?

Definition

A bipartite graph is the disjoint union of two independent sets.



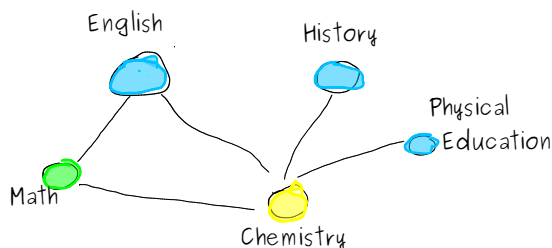
people
jobs

The edges are between a job and a qualified person for that job.

(The jobs cannot all be filled in this example).

3. Scheduling and avoiding conflicts

My high school used to have a very long exam sessions at the end of the year, and there were still some conflicts. I wish the administrators knew graph theory...



Vertices: Subjects

Edges: If someone takes both subjects, i.e. eventual scheduling conflicts.

A coloring of a graph is a partition of a set into independent sets. Scheduling with no conflicts is equivalent to coloring. If we want to use the minimum time, we should use as few colors as possible.

Schedule:

1. History-English-PE
2. Chemistry
3. Math

Reference: Douglas B. West. Introduction to graph theory, 2nd edition, 2001. Sections 1.1.1 and 1.1.2.

We saw last class that two graphs are the same if they are differently, as long as we are simply "moving the vertices". The goal of today's lecture is to make this statement more formal. One tool we will use is adjacency and incidence matrices. We will as well start classifying the graphs.

Matrices: adjacency matrix and incidence matrix

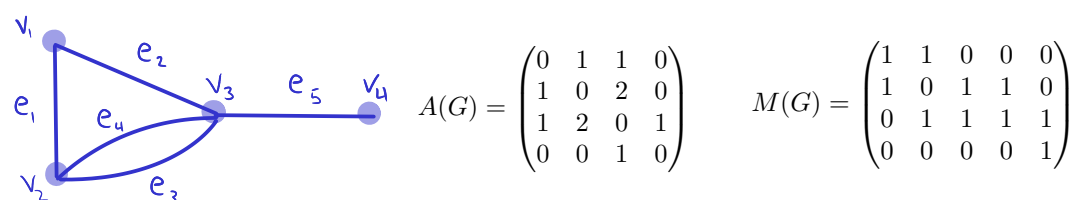
Let $G=(V, E)$ be a graph without any loop (it does not have to be a simple graph). We number the vertices from 1 to n and the edges from 1 to m .

The adjacency matrix of G , written $A(G)$, is the matrix whose (i,j) -entry is the number of edges with endpoints the vertices i and j .

The incidence matrix of G , written $M(G)$, is the n -by- m matrix whose (i,j) -entry is 1 if vertex i is an endpoint of edge j , and otherwise 0.

The adjacency matrix is always a symmetric matrix.

The graph on the left has the following adjacency and incidence matrices:



The degree of a vertex (in a loopless graph) is the number of edges incident to that vertex.

Isomorphisms

So when are two graphs the same? We will answer this question using the notion of a bijection. As a reminder, this is an injective and surjective function, or a one-to-one correspondence.

An isomorphism from a simple graph G to a simple graph H is a bijection $f:V(G) \rightarrow V(H)$ such that every edge uv of G is mapped to the edge $f(u)f(v)$ of H . We then say G and H are isomorphic, denoted $G \cong H$.

This is equivalent to asking that there exists a simultaneous permutation of the rows and columns of the adjacency matrix of G that would yield the adjacency matrix of H .

Example

The following graphs are isomorphic:



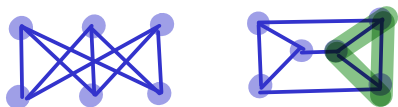
This is easily seen with the bijection that exchanges 1 and 3.

Remarks:

- Finding a bijection of the labels is the way to prove two graphs are isomorphic. However, to prove they are not isomorphic, there are many ways. For example, if the list of degrees is not the same, you will never be able to find an isomorphism. Or if the number of edges (or edges) do not correspond. Among others.
- The isomorphism relation is an equivalence relation, i.e. this is a symmetric relation ($G \cong H$ iff $H \cong G$), a transitive relation ($G \cong H$ and $H \cong J$ imply $G \cong J$) and a reflexive one ($G \cong G$). That means that we can split the graph into equivalence classes.

Example

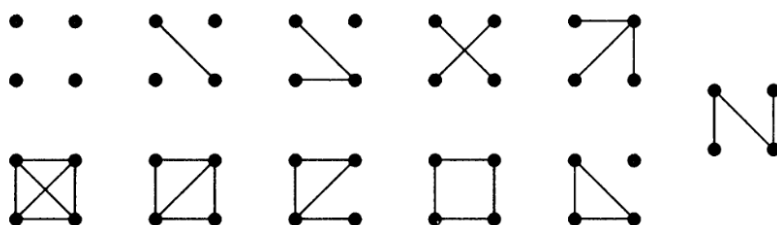
The following graphs are not isomorphic. They both have six vertices, all of degree 3, and nine edges, and they are both connected, but one is bipartite and the other is not. Since they don't have the same properties, they are not isomorphic.



No triangle appear in the first graph.

Example

All the isomorphism classes for graphs with 4 vertices are



Special graphs

There are some graphs that have special names, and that turns out to be handy for whenever we want to use them or to classify them.

Complete graphs: Graphs with n vertices and $\binom{n}{2}$ edges.

K_n

Example: K_5



Complete bipartite graphs: Bipartite graphs with independent sets of size s and r , with sr edges.

$K_{s,r}$

Example: $K_{4,2}$



Paths: Connected graphs, with all the vertices of degree 2, except at most two who have degree 1.

P_n

Example:

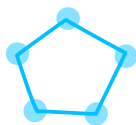
P_4



Cycles: Paths with as many edges as vertices.

C_n

Example: C_5



The complement of the graph G is the graph that has the same vertices and whose edges are all the edges that do not belong to G :
 $K_{|V|} - E(G) = \bar{G}$.

A graph G is self-complementary if its complement \bar{G} is isomorphic to G .

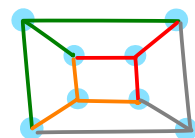
Example: C_5 is self-complementary.



A decomposition of a graph is a list of subgraphs in which every edge appears exactly once.

Example: The cube decomposed into copies of $K_{1,3}$

Note: $K_{1,3}$ is often called the claw.



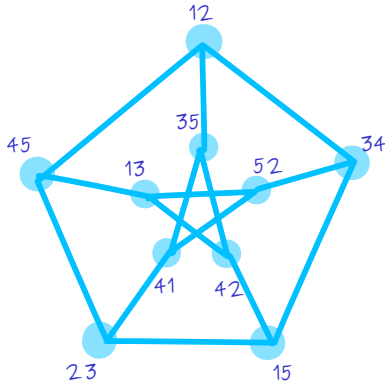
Proposition

A graph G is self-complementary if and only if the complete graph is a decomposition into two copies of G .

The Petersen graph

The Petersen graph is a 10-vertices graph with 15 edges that is very famous, as it is an example or a counter-example to many phenomena.

The Petersen graph is the graph of 2-element subsets of $\{1,2,3,4,5\}$, and there is an edge between 2 subsets if their intersection is empty.



Some properties of the Petersen graph:

- Two non-adjacent vertices share exactly one neighbor.
- The graph has no triangle, but is not bipartite.
- The shortest cycle in the Petersen graph has length 5. (The length of the shortest cycle in a graph is called the girth of the graph.)

Reference: Douglas B. West. Introduction to graph theory, 2nd edition, 2001. Section 1.1

Today's lecture aims to define the proper vocabulary to talk about trajectories and connectedness in graphs.

Definitions

Recall that a path is a graph whose vertices can be ordered without repetition (except maybe for the endpoints) in a sequence such that two consecutive vertices are adjacent. A path is a u,v -path if it starts at vertex u and ends at vertex v .

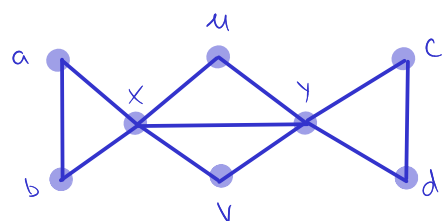
A walk is a list $(v_0, e_1, v_1, \dots, e_k, v_k)$ of vertices and edges such that the edge e_i has endpoints v_{i-1} and v_i . A walk is a u,v -walk if its endpoints (the first and last vertices of the walk) are u and v . If there is no multiple edges, we can write the walk as (v_0, v_1, \dots, v_k) .

A trail is a walk with no repeated edge. Similarly, a u,v -trail has endpoints u and v .

The points that are not endpoints are internal vertices.

The length of a walk, trail, path or cycle is its number of edges. A walk or a trail is closed if its endpoints are the same.

Example



$(a, x, a, b, x, u, y, x, a)$ specifies a closed walk, but not a trail (ax is used more than once).

(a, b, x, u, y, x, a) specifies a closed trail.

The graph contains the five cycles (a, b, x, a) , (u, y, x, u) , (v, y, x, v) , (x, u, y, v, x) and (y, c, d, y) .

The trail (x, u, y, c, d, y, v, x) is not an example of a cycle, since vertex y is repeated (so it is not a path).

Lemma

2

Every u,v -walk contains a u,v -path.

Proof

The proof can be done using the principle of strong induction, and we induce on the number of edges.

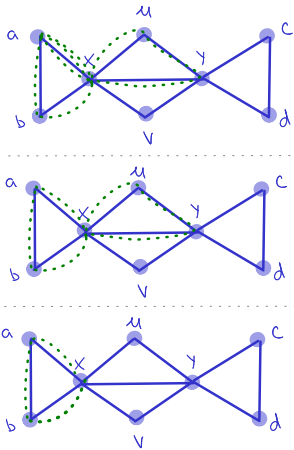
Base case: No edge, $u=v$ is the only vertex in the graph. Only walk has length 0, and is therefore a path.

Induction hypothesis: Assume that, for a walk with $k < n$ edges, there is always a path with the same endpoints.

Induction step: The walk has n edges. There are two cases: either there is no repeated vertex or only the endpoint is repeated, and then the walk is already a path, or there is a repeated vertex x . In the latter case, we delete the edges between the first and last occurrences of x , which leaves us with only one copy of x , and a u,v -walk with fewer than n edges. We can thus use the induction hypothesis to conclude that there exists a u,v -path in the u,v -walk.



Example: The u,v -walk from previous page.



In the walk $(a, x, a, b, x, u, y, x, a)$, we delete what happens between the first two occurrences of a , and get the closed walk (a, b, x, u, y, x, a) . Then we delete what happens between the two occurrences of x , and get the cycle (a, b, x, a) , which is a path.

Connectedness, components and cuts

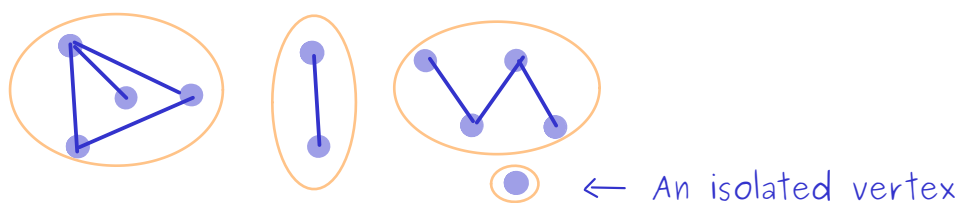
Recall that a graph is connected if and only if there exists a path between u and v for every pair of vertices $\{u, v\}$.

A component of a graph G is a maximal connected subgraph.

A component is trivial if it has no edges; in this case, the unique vertex is said to be an isolated vertex.

Example

The following graph has 4 components, each of which are circled in orange.



Proposition

Every graph with n vertices and k edges has at least $n-k$ components.

Proof

The proof can be done by induction on k . The case of $k > n$ is obvious, since the number of components is always nonnegative.

Base case: If $k=0$, then each of the n vertices are isolated, and there are n components.

Induction hypothesis: Assume that a graph with $k-1$ edges and n vertices has at least $n-k+1$ components.

Induction step: Let $G=(V,E)$ with $|V|=n$ and $|E|=k$. Remove the edge e to get $G-e$. The component of G containing e can either be split into two components by removing e , or stay a component. So G has either the same number of components as $G-e$, or one fewer. By induction hypothesis, $G-e$ has at least $n-k+1$ components, so G has at least $n-k$.

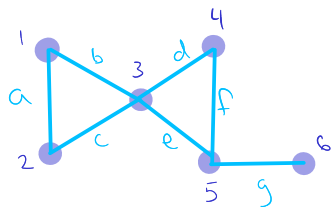


In the last proof, we had to distinguish the cases where removing the edge was creating a new component or not. An edge whose deletion creates new component has a special name:

A cut-edge or cut-vertex of a graph is an edge or vertex whose deletion increases the number of components. We write $G-e$ or $G-M$ for the subgraph of G obtained by deleting an edge e or a set of edges M ; we write $G-v$ and $G-S$ for the graph obtained by deleting a vertex v or a set of vertices S along with their incident edges.

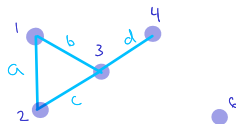
A subgraph obtained by deleting a subset of vertices and their incident edges is an induced subgraph: we denote it $G[T]$ if $T=V \setminus S$ and we deleted the vertices in S .

Example



Vertices 3 and 5 are cut-vertices, and the edge g is the only cut-edge.

The induced subgraph for the vertices 1, 2, 3, 4 and 6:



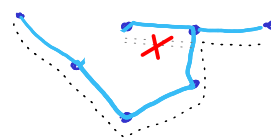
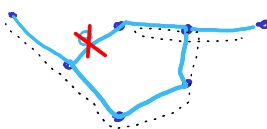
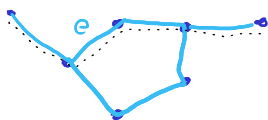
Theorem

An edge is a cut-edge if and only if it belongs to no cycle.

Proof

Let $e=uv$ be an edge in the graph G , and let H be the component containing e . We can restrict the proof to H , since deleting e does not influence the other components. We want to prove that $H-e$ is connected if and only if e is in a cycle in H .

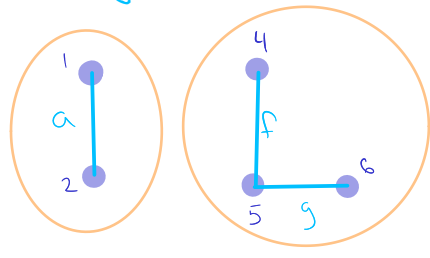
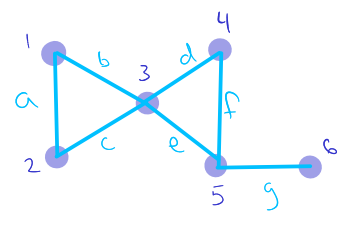
If e is in a cycle c , $c-e$ is a path P between v and u avoiding the edge e . To show that $H-e$ is still connected, we need to show that, for every pair of vertices $\{x, y\}$, there is a path between x and y . Since H is connected, there exists in H such a path. If that path does not contain e , it is still in $H-e$. Otherwise, replace e by P , and remove an edge from that path everytime it appears twice consecutively.



If $H-e$ is connected, then there exists in it a path P between u and v . Hence, adding edge $e=uv$ creates the cycle $P+e$. ■

The last theorem allows us to characterize cut-edges. Would such a theorem be possible for cut-vertices? The following example proves that asking for it to be outside a cycle is not a requirement for a cut-vertex, since vertex 3 is a cut-vertex, and belongs to two cycles:

Removing vertex 3:



Two connected components

Reference: Douglas B. West. Introduction to graph theory, 2nd edition, 2001. Section 1.2

Today's lecture aims to give the important properties of bipartite graphs. We will also define Eulerian circuits and Eulerian graphs: this will be a generalization of the Königsberg bridges problem.

Characterization of bipartite graphs

The goal of this part is to give an easy test to determine if a graph is bipartite using the notion of cycles: König theorem says that a graph is bipartite if and only if it has no odd cycle.

Lemma

Every closed walk of odd length contains an odd cycle. This is called an odd closed walk.

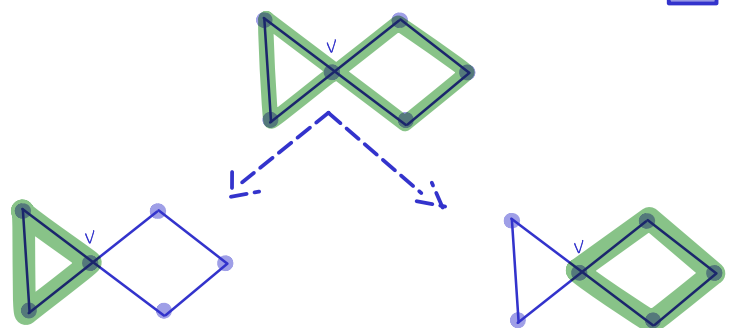
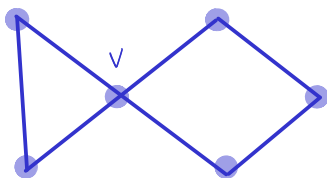
Proof

We prove it using strong induction on the length of the walk (i.e. the number of edges).

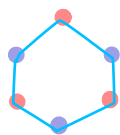
Base case: length 1. The walk is a loop, which is an odd cycle.

Induction hypothesis: If a walk has odd length at most n , then it contains an odd cycle.

Induction step: Consider a closed walk of odd length $n+1$. If it has no repeated vertex (except the first and last one), this is a cycle of odd length. Otherwise, assume vertex v is repeated. We can split the walk into two closed walks starting and ending at v , one of even length, and one of odd length smaller than n . By induction hypothesis, the latter contains an odd cycle.



That lemma will be helpful for characterizing bipartite graphs. Of course, bipartite graphs can have even cycles, which starts in one independent set and ends there.



We can represent the independent sets using colors.

Theorem (König, 1936)

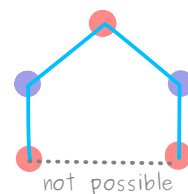
A graph is bipartite if and only if it has no odd cycle.

Proof

Notice that a graph is bipartite if and only if all its components are bipartite. So we do the proof on the components.

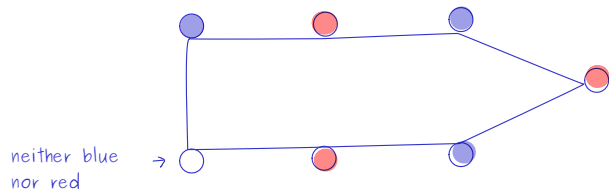
⇒ We prove the contrapositive: if it has an odd cycle, it is not bipartite.

Since every cycle must end at the vertex where it starts, it starts and ends in the same independent set. Since every edge is going from one set to the other, we alternate between the two sets. At the end of the cycle, we cannot close it, since we would need to change the set of the first vertex. Hence, if a connected graph is bipartite, it has no odd cycle.

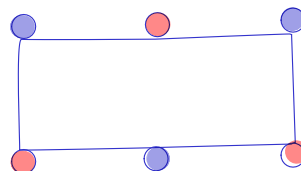


⇐ We still need to prove that a connected graph without odd cycle is bipartite. If the graph has only one vertex, it is bipartite.

Otherwise, start at vertex u , and color its neighbors with color blue. Then, color the neighbors of the blue vertices in red, and repeat this process by coloring the neighbors of the red vertices in blue, until all vertices have been colored. I claim that no vertex will change color in that process; assume otherwise, that v is changing color. That would mean that there exists a path of odd length from u to v (the one that colors v in blue), and a path of even length doing it (the one that colors v in red). The combination of these two paths is an odd walk, and contains an odd cycle, which is prohibited by the hypothesis. Hence, the coloring is well defined, and the two colors represent independent sets. The graph is bipartite. ■



odd cycle



even cycle

Technique for checking whenever a graph is bipartite:

- If it is bipartite, prove it by finding two independent sets.
- If it is not bipartite, find an odd cycle.

Eulerian circuits

A graph is Eulerian if it has a closed trail containing all the edges.

The graph in the Königsberg bridges problem is not Eulerian. We saw that the fact that some vertices had odd degree was a problem, since we could never return to that vertex after leaving it for the last time.

Theorem

A graph is Eulerian if and only if it has at most one nontrivial component (i.e. component with edges), and if every vertex has even degree.

Proof

We first prove \Rightarrow by proving the contrapositive: if a graph has more than one non-trivial component, or if there is a vertex of odd degree, then the graph is not Eulerian.

If a graph has at least two non-trivial components, there can't be a walk going through all the edges, since they are in separate components.

If a graph has a vertex of odd degree, we are in the case of the Königsberg bridges: we can leave the vertex more often than we can come back (or vice-versa), and thus our trail cannot be closed.

\Leftarrow We need to prove that a connected graph with only vertices of even degrees is Eulerian. We can ignore the isolated vertices for this since we are focusing on the edges. The following lemma is useful:

Lemma

If every vertex of a graph has degree at least 2, then it contains a cycle.

Proof

Let P be a maximal path in that graph. If it is a cycle, we are done. Otherwise, let u be an endpoint of P .

Since it has degree at least 2, u has a neighbor v not in P . But since P is maximal, that means that v is already in P , and the edge uv completes the cycle.

Proof of the theorem (continued)

We proceed by induction on the number of edges.

Base case: 0 edge, the graph is Eulerian.

Induction hypothesis: A graph with at most n edges is Eulerian.

Induction step: If all vertices have degree 2, the graph is a cycle (by definition) and it is Eulerian. Otherwise, let G' be the graph obtained by deleting a cycle. The lemma we just proved shows it is always possible to delete a cycle. By induction hypothesis, G' is Eulerian. To build an Eulerian circuit in G , start by the cycle we just deleted, and append the Eulerian circuit of G' .

Proposition

Every graph with only vertices of even degree decomposes into cycles.

Eulerian circuits are closed trails that pass through all edges. A similar property is being Hamiltonian: a Hamiltonian circuit is a circuit that passes through all vertices exactly once. A Hamiltonian graph is a graph with a Hamiltonian circuit.

Today, we are doing a bit of combinatorics and will deduce some properties on the degrees, number of edges and number of vertices.

We already defined the degree of a vertex in a loopless graph to be the number of edges incident to it.

For a general graph, define the degree $d_G(v)$ of the vertex v to be the number of edges incident to it, with each loop counted twice.

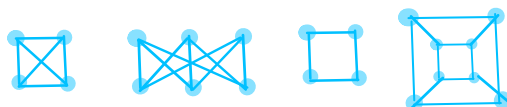
The maximum degree of a vertex is denoted $\Delta(G)$ and the minimum degree is denoted $\delta(G)$.

A graph is said to be regular if $\delta(G) = \Delta(G)$.

The order of a graph $G = (V, E)$ is $|V|$, as the size of G is $|E|$.

Example

- K_n is a regular graph. Each vertex has degree $n-1$.
- $K_{m,n}$ is regular if and only if $m=n$. Then, the degree is always n .
- A connected regular graph that has the same order and size is a cycle.
- Hypercubes are regular graphs.



Counting and bijections

Proposition (degree-sum formula)

If $G = (V, E)$ is a graph, then $\sum_{v \in V} d_G(v) = 2|E|$.

Proof

For each edge, there are two endpoints (maybe equal). If the endpoints are different, this edge contributes for 1 in the degree of two different vertices. If the edge is a loop, it adds 2 to the degree of the vertex it is incident to. So either way, every edge accounts for 2 in the total degree count. ■

Corollary

In any graph $G = (V, E)$, the average degree is $2|E|/|V|$, and $\delta(G) \leq 2|E|/|V| \leq \Delta(G)$.

Corollary

(2)

Every graph has an even number of vertices of odd degree.

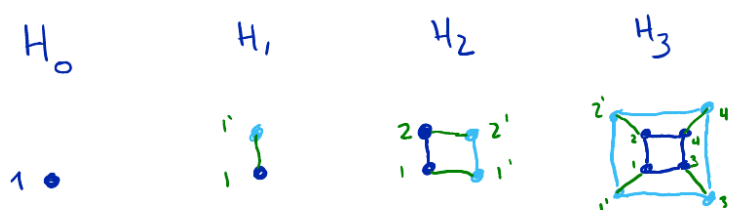
Corollary

A k -regular graph (i.e. a regular graph in which the degree of each vertex is k) has $k|V|/2$ edges.

Example: Hypercubes

The n -dimensional hypercube H_n is defined recursively as:

- H_0 is the simple graph with one vertex
- H_{n+1} is obtained by creating two copies of H_n and appending an edge between corresponding vertices in the two copies.



Proposition

H_n is regular, as each vertex has degree n .

Proof

The proof can be done by regular induction.

The base case is H_0 , and it has no edge.

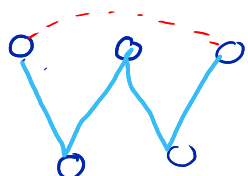
Induction hypothesis: The n -dimensional hypercube H_n is n -regular.

Induction step: The $(n+1)$ -dimensional hypercube is made of two copies of H_n , and we add an edge between every pair of similar vertices in the two copies. This way, we add exactly one to the degree of each vertex from H_n , and that degree is, by induction hypothesis n .



Proposition

If $k > 0$, then a k -regular bipartite graph has the same number of vertices in its two independent sets.



Either not bipartite or not regular.

Proof

Since the graph is regular, all vertices have degree k . If there are m edges in total, the sum of the degrees for all the vertices in one independent set is m , as every edge has exactly one endpoint in that set. Since the graph is k -regular, there are m/k vertices in each set, so the order of both sets is the same.




Vertex-deletion and reconstruction conjecture

Is it possible to reconstruct a graph if you have only a list of its subgraphs? There is a long-standing, and still open conjecture saying it is, and so far we know it is almost always possible (that being understood in a probabilistic sense).

For a graph G , a vertex-deleted subgraph is an induced subgraph $G-v$ obtained by deleting a single vertex v .

Example



has vertex-deleted subgraphs 4 x



1 x



Proposition

For a simple graph $G=(V,E)$ of order $n \geq 2$ and size m ,

$$m = \frac{\sum_{v \in V} \#E(G-v)}{n-2}$$

where $\#E(G-v)$ is the number of edges in the graph $G-v$.

Proof

We start with the summation, and we will prove the summation is equal to $m(n-2)$:

$$\sum_{v \in V} \#E(G-v) = \sum_{v \in V} |E| - d_G(v) = \sum_{v \in V} |E| - \sum_{v \in V} d_G(v) = mn - 2m$$

Conjecture (Reconstruction Conjecture – Kelly, Ulam, 1942)

If G is a simple graph with at least three vertices, then G is uniquely determined by the list of its vertex-deleted subgraphs (up to isomorphism).

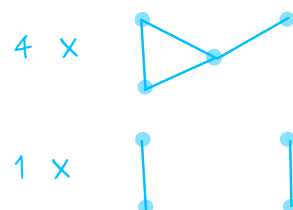
Note that the hypothesis that G has at least three vertices is important. Otherwise, we would find a counterexample with two vertices, since both simple graphs with two vertices have the same set of vertex-deleted subgraphs.



Example



has vertex-deleted subgraphs



To reconstruct the graph, we know that 4 vertices have degree $\#E(G)-4$ and 2 has degree $\#E(G)-2$. Using the proposition, the number of edges in G is $(2+4 \times 4)/3=6$. So the list of degrees is $(2,2,2,2,4)$, and the graph is connected.

That means that the vertices are in two cycles. The length of the cycles can be found by looking at the subgraphs: there is at least one cycle of length 3. Since the graph is simple, both cycles have length 3 and the graph has to be isomorphic to the bowtie.

Even though the conjecture is not proven, there are a number of cases that are known. Also, we can know some properties from the list of subgraphs; for example if the graph is connected.

Reference: Douglas B. West. Introduction to graph theory, 2nd edition, 2001. Section 1.3

Extremal problems consider the minimum and maximum numbers some statistics on a class of graphs can reach. We introduce some of the types of proofs useful in graph theory: Algorithmic, and by construction.

First example

In any simple graph (V, E) , the maximum number of edges is

$$\binom{|V|}{2} = \frac{|V|(|V|-1)}{2}$$

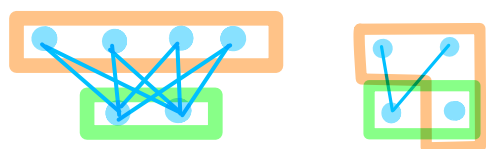
Proof

In a simple graph, there can be at most one edge per pair of distinct vertices. The maximum number of edges appear in $K_{|V|}$.

This is an extremal problem, since we are looking at the maximum number of edges. The class of graphs here is all simple graphs.

Example

In a bipartite graph with independent sets of size k and m , there can be at most km edges.



Independent sets of size 2 and 4, 8 edges at maximum. km is the number of edges of $K_{m,k}$.

Edges in connected graph

Proposition

The minimum number of edges in a connected graph with n vertices is $n-1$.

Proof

We need to prove two things:

- If a graph with n vertices has fewer than $n-1$ edges, it is not connected.
- There exists a connected graph with n vertices and $n-1$ edges.

(2)

Recall from last week (Friday), that a graph with n vertices and m edges has at least $n-m$ components. Hence, if $m < n-1$, the graph has at least 2 components and is not connected.

Also, the path with n vertices has $n-1$ edges and is connected, proving that the minimum is realized.



Remark (on the proof technique)

When giving the solution to an extremal problem, there are two parts to be proven:

- That the value we give is minimal (or maximal), i.e. that you cannot give a lower (respectively, higher) value.
- That this value can be realized on at least one graph of the class we consider.

Proposition

Let G be a simple graph with n vertices. If the minimum degree is $\delta(G) \geq (n-1)/2$, G is connected.

Proof

The minimum degree of the graph means that every vertex should have at least this number of neighbors, in a simple graph.

To prove that G is connected, we must show that there is a path between any pair of vertices $\{u, v\}$. We will in fact prove that there exists a path of length at most 2.

- If $\{u, v\}$ are adjacent, they are obviously in the same component.
- Otherwise, they share at least one neighbor w : There are $n-2$ other vertices, and the sum of their degree is $d(u) + d(v) \geq n-1$. Hence, $u-w-v$ is a path connecting them.



A bound is said to be sharp if improving it (reducing a lower bound or increasing an upper bound) would make the statement wrong.

The bound in the last problem is sharp. To prove it, we give an example of a graph with n vertices and minimum degree $\lfloor \frac{n}{2} \rfloor - 1$ that is not connected: This graph is the disjoint union of $K_{\lfloor \frac{n}{2} \rfloor}$ and $K_{\lfloor \frac{n}{2} \rfloor}$.



K_5 , degree 4



K_6 , degree 5

11 vertices

Minimum degree is 4, just under $5 = (11-1)/2$.

Graph is disconnected.

Bipartite subgraph

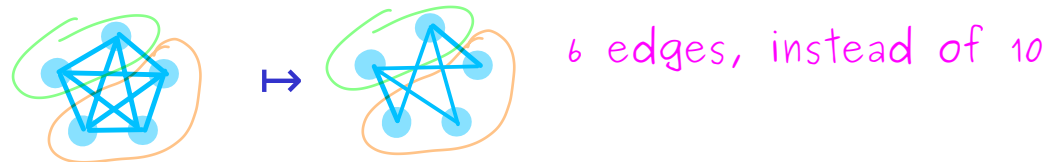
Here we prove that, given a graph G , we can always find a bipartite subgraph with at least a fixed number of edges. We give an algorithmic proof to construct the graph, but a proof can also be done by induction.

Theorem

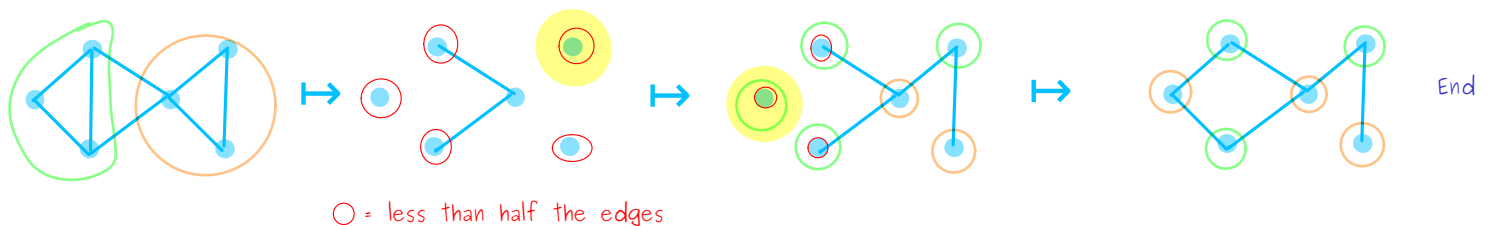
Every loopless graph $G=(V,E)$ has a bipartite subgraph with at least $|E|/2$ edges.

Proof (algorithmic)

We start with any partition of the vertices into two sets X and Y . Let H be the subgraph containing all the vertices, but only the edges with one endpoint in X and one in Y .



Let v be a vertex in X . If H has fewer than half the edges incident to v , then it means that v has (in G) more neighbors in X than in Y . To increase the number of edges in H , switch v to Y . The number of edges just increased.

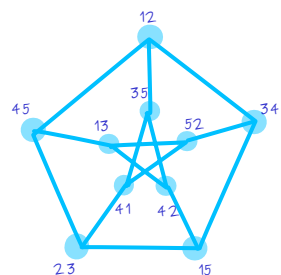


As long as H does not have at least half the edges of G at every vertex, there are vertices that can be swapped from X to Y or Y to X ; repeat this process. When it terminates, the number of edges in H is always at least half the number of edges of G . ■

Triangle-free graphs

A graph is said to be triangle-free if it has no three vertices that are all adjacent. In general, a graph G is H -free if it does not contain H as a subgraph.

The Petersen graph is triangle-free (but not bipartite).



Theorem (Mantel, 1907)

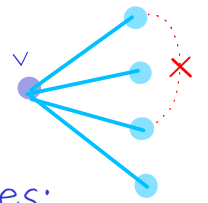
The maximum number of edges in a simple triangle-free graph with n vertices is $\lfloor \frac{n^2}{4} \rfloor$.

Proof

For the proof, we again need to prove two things:

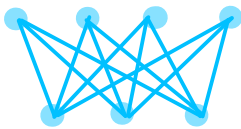
- that a triangle-free graph with n vertices cannot have more than $\lfloor \frac{n^2}{4} \rfloor$ edges.
- that there exists, for any n , a graph with n vertices and $\lfloor \frac{n^2}{4} \rfloor$ edges that has no triangle.

For the first part, assume the graph is triangle-free. Take a vertex v of maximal degree Δ . Its Δ neighbors cannot have edges among them. So every edge of G must have at least one endpoint in a non-neighbor of v , or in v itself. There are $n - \Delta$ such vertices. Each such vertex has degree at most Δ .



Therefore, we give an upper bound on the number of edges: the number of edges is at most $\Delta(n - \Delta)$ (because $n - \Delta$ is the number of vertices not adjacent to v). Maximizing $\Delta(n - \Delta)$ gives $\Delta = n/2$. Hence, the number of edges is at most $\lfloor \frac{n^2}{4} \rfloor$.

For the second part, we must prove that a triangle-free graph has $\lfloor \frac{n^2}{4} \rfloor$ edges. This is the case of $K_{\lceil \frac{n}{2} \rceil, \lfloor \frac{n}{2} \rfloor}$.



We can split 7 vertices into two sets of 3 and 4 vertices, which leads to 12 edges, which is the smallest integer below $49/4$.

We look at the list of degrees to get some information on the graph. We also look at what list of nonnegative integers can be the degree sequence of some graph.

Let G be a graph with vertices v_1, v_2, \dots, v_n . The degree sequence of G is the list $d(v_1), d(v_2), \dots, d(v_n)$. Usually, we write this sequence in decreasing order (and reorder the labels accordingly):

$$d_1 \geq d_2 \geq \dots \geq d_n \geq 0$$

Proposition

The nonnegative integers d_1, d_2, \dots, d_n are the degree sequence of some graph if and only if their sum is even.

Proof

We need to prove that the condition is both necessary and sufficient.

\Rightarrow (the condition is necessary) We already showed (last week) that the sum of the degrees in a graph is always even.

\Leftarrow (the condition is sufficient) This part of the proof is done by constructing a graph with a given degree sequence.

First, we consider all the vertices with odd degree (there is an even number of them). We pair them by drawing exactly one edge at each of these odd vertices. After this step, the number of endpoints to be added to every vertex is even, so we can add half this number of loops, making it a degree sequence.



Example

$(5, 3, 2, 1, 1)$ can be realized on a (non-simple) graph in this way:



Of course, this technique does not work for simple graphs, because of the loops. Moreover, 5 cannot be the degree of a vertex in a simple graph with 5 vertices.

A graphic sequence is a list of nonnegative integers that is the degree sequence of some simple graph. A simple graph with degree sequence d realizes d .

Characterization of graphic sequences

We already noticed the two obvious conditions for a nonnegative integers sequence to be graphic, i.e. the sum of degrees must be even and the maximal number cannot be greater than $n-1$. However, this is not enough, as shown with the degree sequence $(2,0,0)$, which must necessarily involve a loop.



Theorem (Havel 1955, Hakimi 1962)

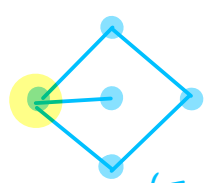
The only one-element graphic sequence is (0) .

For $n > 1$, an integer list d of length n is graphic if and only if d' is graphic, where d' is obtained by deleting its largest element (Δ) and 1 from the Δ next largest degrees.

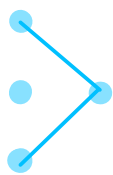
Example

The graph below has degree sequence $d = (3, 2, 2, 2, 1)$.

It is obviously graphic by the picture. Here, $\Delta = 3$, and we obtain d' as $(1, 1, 1, 1)$. Notice that it is not the degree we obtain by deleting the highest-degree vertex (shown on the right), which would be $(2, 1, 1, 0)$. And $(1, 1, 1, 1)$ is also realizable, as shown below.



$(3, 2, 2, 2, 1)$



$(2, 1, 1, 0)$



$(1, 1, 1, 1)$

Proof (of theorem)

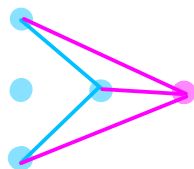
The case where there is only one vertex is obvious.

We need to prove that this condition is necessary and sufficient when $n > 1$.

\Leftarrow (sufficient) If d' is realizable, there exists a graph G' with vertices having d' as degrees. I want to add a vertex that has degree Δ greater than the largest degree of G' . To do so, I add the vertex and connect it to the Δ vertices with larger degrees in G' , realizing d .

$$d' = (2, 1, 1, 0)$$

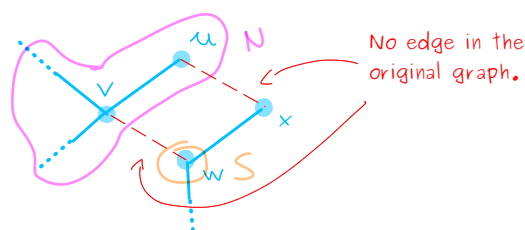
$$d = (3, 3, 2, 2, 0)$$



=> (necessary) There are two cases to consider. 1) The vertex v of degree Δ has neighbors that have the Δ next highest degree. Deleting v and its incident edges yield a graph with degree sequence d' .
 2) Consider the neighborhood of v (the vertex of higher degree) and call it N . Let S be the set of the Δ vertices having the highest degrees (except for v). Case 1) is when $N=S$, so here they are distinct. We will transform G to get $N=S$.

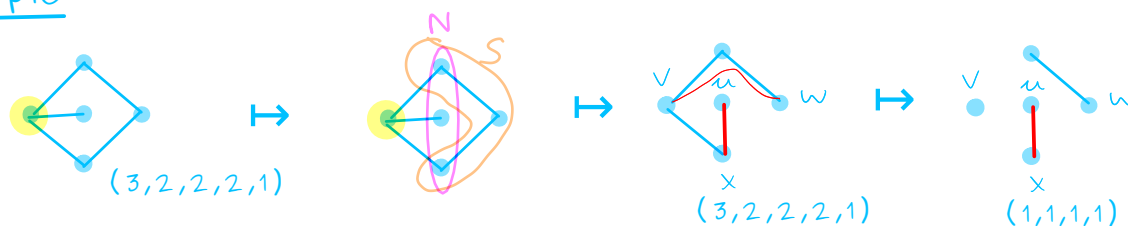
Take a vertex u in $N \setminus S$, so u is adjacent to v , but has a low degree, and take w in $S \setminus N$ (not adjacent to v , but high degree).

Since w has higher degree than u in $G \setminus \{v\}$, w has at least one neighbor x that is not adjacent to u .



By switching the edges uv and xw to vw and ux (from the blue to the red in the picture), we increase $|N \cap S|$. We repeat this process as long as $N \neq S$. When $N=S$, we use the first case.

Example



The case of loopless graphs

Multigraphs (even loopless) have a much easier characterization for degree sequences, as given by this theorem of Hakimi.

Theorem (Hakimi, 1962)

A sequence of decreasing nonnegative integers d_1, d_2, \dots, d_n is the degree sequence of a loopless graph if and only if its sum is even and

$$d_1 \leq d_2 + \dots + d_n$$

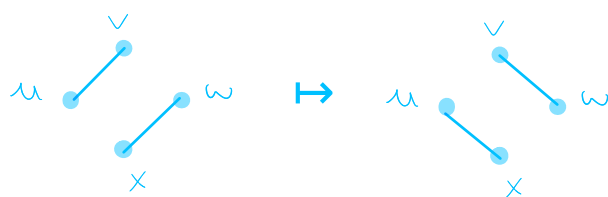
Proof is left as homework for next week's set.

Hint: You can proceed by construction, but it might be easier to do induction (not necessarily on the number of vertices).

Graphs with same graphic sequence

In the last proof, we exchanged the endpoints of some edges to get a new graph with the same graphic sequence.


A 2-switch is the replacement of a pair of edges $\{uv, wx\}$ by $\{ux, vw\}$, provided ux and vw did not already exist in the graph.



Remark

A 2-switch always preserves the degree of each vertex.

Example



Both graphs have degree sequence $(2, 2, 2, 2, 2, 2)$.

Theorem (Berge 1973)

Two simple graphs G and H have the same graphic sequence if and only if there is a sequence of 2-switches from G to H .

The proof is omitted, but can be found on page 47 of the textbook. The condition is clearly sufficient, as the 2-switches preserve the degree of each vertex.

We introduce directed graphs and their terminology. Applications include Markov chains, automata and De Bruijn graphs.

A directed graph or digraph is made of two sets: the vertices, and a set of edges defined as ordered pairs of two vertices: a tail and a head. For one edge, the tail and the head are both endpoints, and we say the edge is from its tail to its head. We sometimes use the word arrow for the edges of a directed graph.

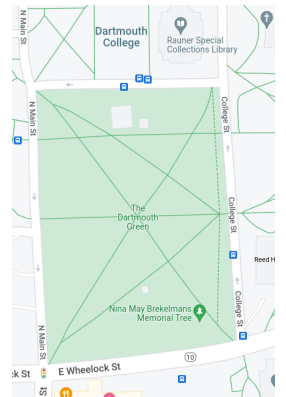
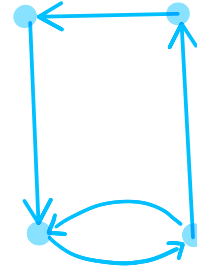
$u \rightarrow v$ Edge from u to v

Some examples

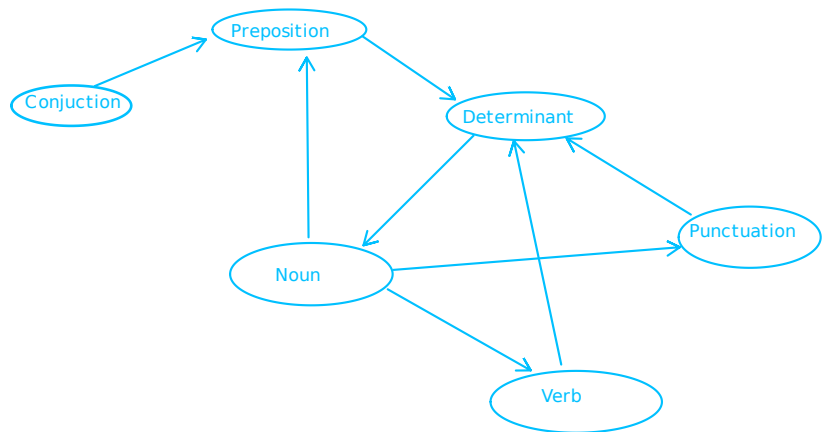
Trail etiquette



Car traffic around the Green



Parts of speech in the sentence: "While at the beach, the dog eats the biscuits in the box."



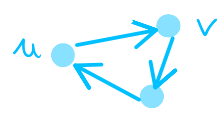
Like in undirected graphs, a loop is an edge with its two endpoints being equal. Multiple edges are edges having the same tail and the same head.

$u \rightarrow v$ Not a multiple edge

A directed graph is simple if there is no loop nor multiple edges.

Example: All the directed graphs above are simple.

In a simple digraph, we write the edge from u to v as uv (and so this is not the same as vu). If uv is in the graph, v is a successor of u and u is a predecessor of v .




A simple digraph is a path if its vertices can be ordered so that v follows u in the vertex ordering if and only if there is an edge from u to v . The only vertex that can be repeated is the first and the last vertices, if they are equal; the path is then a cycle.

Equivalently, we can define walks and trails (walks without repeated edges) in the same way as in undirected graphs.

The underlying graph of a digraph D is the undirected graph G in which we removed the orientation of the edges. Hence, $uv=vu$, and if uv and vu both appear in D , uv is a multiple edge of G .

Remark: The underlying graph of a simple digraph is not always a simple graph.



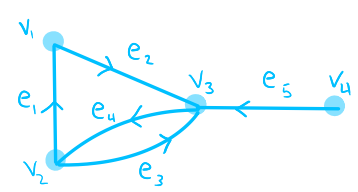
Subgraphs and isomorphisms are defined in the same way as for undirected graphs.

Adjacency and incidence matrix

In a digraph, the adjacency and incidence matrices are not defined in the same way as in graphs.

The adjacency matrix $A(D)$ of a loopless digraph D has u,v -entry the number of edges from u to v . The incidence matrix has v,e -entry $+1$ if v is tail of e , -1 if it is its head, and 0 if v is not an endpoint.

The digraph on the left has the following adjacency and incidence matrices:



$$A(D) = \begin{pmatrix} 0 & 0 & 1 & 0 \\ 1 & 0 & 1 & 0 \\ 0 & 1 & 0 & 0 \\ 0 & 0 & 1 & 0 \end{pmatrix} \text{ The adjacency matrix is not more symmetric!}$$

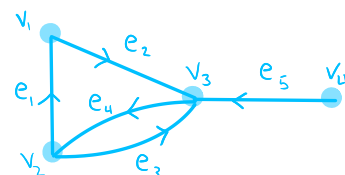
$$M(G) = \begin{pmatrix} -1 & +1 & 0 & 0 & 0 \\ +1 & 0 & +1 & -1 & 0 \\ 0 & -1 & -1 & +1 & -1 \\ 0 & 0 & 0 & 0 & +1 \end{pmatrix}$$

Connectedness: weak and strong

3

A digraph is weakly connected if its underlying graph is connected. It is strongly connected if there is a path from u to v , for every two vertices u and v .

The graph below is weakly connected, but not strongly connected, as there is no path from vertex 3 to vertex 4.



The strong components of a digraph are its maximal strongly connected subgraphs.

Degree and neighborhood, in and out

Let v be a vertex in a directed graph. Its outdegree is the number of edges that have v as a tail, and is noted $d^+(v)$. The indegree is the number of edges that have v as a head, $d^-(v)$.

The number of edges is $\sum_{v \in V} d^+(v) = \sum_{v \in V} d^-(v)$.

The out-neighborhood of v is the set of vertices $\{u : vu \text{ is an edge}\}$.

The in-neighborhood is defined similarly.

Eulerian graphs

A digraph is Eulerian if it contains an Eulerian circuit, i.e. a trail that begins and ends in the same vertex and that walks through every edge exactly once.

Obviously, a graph will not be Eulerian if it has more than one nontrivial component or if the sum of the in and out degree of some vertex is odd. The following theorem gives a classification of Eulerian digraphs.

Theorem

A digraph is Eulerian if and only if there is at most one nontrivial strong component and, for every vertex v , $d^+(v) = d^-(v)$.

Proof

(\Rightarrow) If there is an Eulerian circuit, it visits all the vertices in a nontrivial component, so there is at most one of them. Also, the Eulerian circuit goes in and out of v the same number of times, which

means the in- and outdegrees must be equal.

(\Leftarrow) We prove by induction on the number of edges that if the in- and outdegrees are the same at every vertex in a strongly connected graph, there is an Eulerian circuit.

Base case: When there is no edge, the empty circuit is Eulerian.

Induction hypothesis: Suppose that, whenever there is at most m edges, every graph that has, at each vertex, the same in- and outdegree, and that has at most one non-trivial strong component, is Eulerian.

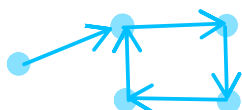
– For a graph with $m+1$ edges, we first prove the following lemma:

Lemma

If the outdegree of every vertex is at least 1, then the digraph has a cycle.

Proof (of the lemma)

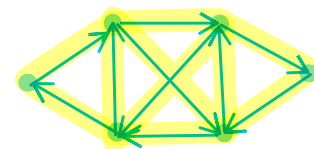
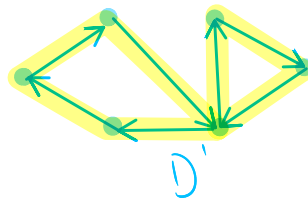
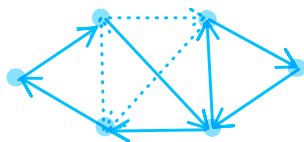
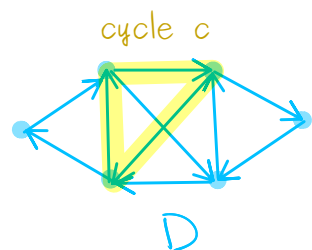
Let v be a vertex. Since it has outdegree at least 1, there is a walk starting at v . Since every vertex has outdegree at least 1, the walk can always be extended. Since the number of vertices in D is finite, the walk will go back to a vertex it already visited. The first time this happens, the part of the walk between the two occurrences of a vertex is a cycle.



Proof of the theorem (continued)

For a graph with $m+1$ edges, consider the unique nontrivial strong component. The lemma applies to it, so there is a cycle c . Removing the edges of c to the digraph preserves the equality of the in- and outdegrees. Let D' be that reduced graph. We can apply the induction hypothesis to get an Eulerian circuit in each strong component of D' . Each such component shares at least one vertex with c , since they are in the same strong component of D . To build an Eulerian circuit, we travel through c . Each time we get to a vertex that has neighbors not in c , we visit all the edges in its strong component: we know it is possible since the component is Eulerian. That process gives an Eulerian circuit in the original digraph.

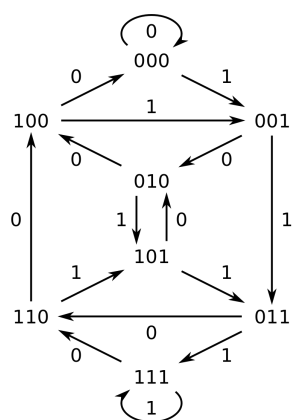




Application: De Bruijn cycles

Let D_{n+1} be the following digraph:

- vertices are binary sequences of length n
- there is an edge from a sequence s to another s' if the $n-1$ last letters of s are the $n-1$ first letters of s' .



As an example, D_4 is illustrated on the left.

Proposition

The De Bruijn graphs are Eulerian.

For the proof, use the previous theorem and verify the equality of the out- and indegrees.

Problem: What is the minimum length for a sequence containing all the binary sequences of length n ? To solve this problem, use the above proposition and your homework.

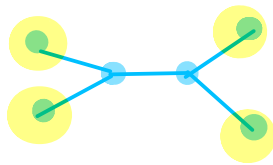
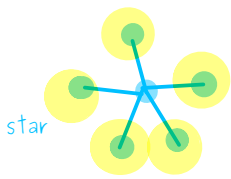
We introduce the notion of trees, a very important type of graph. Over the next week or two, we will study the properties of trees and forests.

Definition

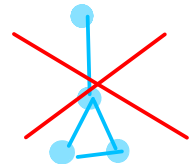

A graph with no cycle is acyclic.

An acyclic graph is a forest; a connected forest is a tree.

A leaf is a vertex of degree 1 in a tree.



a forest



not a tree



Every component here (except the one with a red X on it) is a tree, and the whole thing (without the one with the X) is a forest.

Leaves are highlighted. A star is the tree in which there is one vertex adjacent to every other.

Caveat: As graphs, trees don't need to have one specific root. We can always distinguish one root, but it is not needed. We will go back to this subject later.

Lemma

Every tree with at least two vertices has at least two leaves.

Deleting a leaf from an n -vertex tree produces a tree with $n-1$ vertices.

Proof

A tree is always connected so there is a path p between any two vertices $\{u, v\}$. Since there is no cycle, that path can only be extended finitely many times without returning to a previously visited vertex. The last time it can be extended in one direction, that vertex is a leaf, as there is no cycle.

When one deletes a leaf u from a tree, it does not disconnect it, (2) since there is no path going through that vertex (not as an endpoint), i.e. for v, w in the graph, there is no path passing through u from v to w . ■

One consequence of that lemma is that we can build every tree with at least two vertices by "adding leaves". We will discuss that topic on Wednesday.

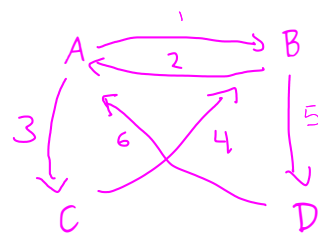
The following theorem gives multiple characterizations of trees:

Theorem

Let G be a graph with n vertices ($n \geq 1$). The following statements are equivalent:

- (A) G is connected and has no cycles.
- (B) G is connected and has $n-1$ edges.
- (C) G has no cycles and $n-1$ edges.
- (D) G has no loop and has, for each pair of vertices $\{u, v\}$, exactly one uv -path.

The proof of such a statement is a closed walk that visits every vertex in the complete digraph with vertices A, B, C and D :



Proof

(1 $A \Rightarrow B$) We need to prove that if G is connected and has no cycle, it has $n-1$ edges.

By theorem from 4/8, it must have at least $n-1$ edges for it to be connected. To prove there is at most $n-1$ edges, we prove that a graph with n edges has a cycle (which is not permitted, by hypothesis). This proof is by induction on n (the number of vertices):

Base case: If $n=1$, the edge is a loop and that is a cycle.

Induction hypothesis: Assume a graph with k vertices and k edges has a cycle.

Induction step: We need to prove that a connected graph with $k+1$ vertices and $k+1$ edges has a cycle. If there is a leaf, remove it and delete the incident edge; applying induction hypothesis tells us that there is a cycle in the rest of the graph.

If there is no leaf, then the lemma from page 1 proves the graph is not a tree.

(2 $B \Rightarrow A$) We need to show that if G is connected and has $n-1$ edges, it has no cycle. We prove the contraposition: if G is connected and has a cycle, there is more than $n-1$ edges.

Since G has a cycle, there is at least an edge that is not a cut-edge (by the theorem from 4/1). Deleting that edge would mean the graph has one fewer edge and is connected, which means, by theorem from 4/8, that the graph with one fewer edge has at least $n-1$ edges. So the original graph has at least n edges.

Until now, we proved $A \Leftrightarrow B$. They are equivalent, so we can use them together from now on.

(3 $A \Rightarrow C$) Since $A \Leftrightarrow B$, we know that G is connected, has no cycle and has $n-1$ edges, which already proves C).

(4 $C \Rightarrow B$) We want to show that if a graph has $n-1$ edges and no cycles, it is connected. We look at each of the k components.


In the component i ($1 \leq i \leq k$), assume there are $n(i)$ vertices.

Since the component is connected and has no cycle, it has $n(i)-1$ edges (by $A \Rightarrow B$). Hence, the total number of edges is

$\sum_{i=1}^k (n(i)-1) = \sum_{i=1}^k n(i) - k = n - k$. However, the hypothesis of C is that the graph has $n-1$ edges. So there is exactly one component, and the graph is connected.

Now, A , B and C are equivalent. That means that two characteristics among connectedness, no cycles and $n-1$ edges are sufficient to show a graph is a tree.

(5 $B \Rightarrow D$) Since $B \Rightarrow A$, the graph has no cycle; in particular, it has no loop. It is also connected, so there is a path p between any pair of two vertices $\{u, v\}$. To show uniqueness of that path, we use the hypothesis that there is no cycle, and contradiction: Assume there exist 2 paths p and q between u to v .



Let u' be the first vertex in p and q whose next edges differ, and let v' be the next vertices that appear both in p and q . Then, the part of p between u' and v' and the part of q between u' and v' are paths with no common vertices that have the same endpoints; gluing them together creates a cycle. Hence, there is a unique path between u and v , for any pair of vertices $\{u, v\}$.

(\Leftarrow $D \Rightarrow A$) Since there is a path between every pair of vertices, the graph is connected. The uniqueness of the path means there is no cycles, proving A . ■

Corollary

a) Every edge of a tree is a cut-edge. (by A)

b) Adding one edge to a tree forms exactly one cycle (corollary of $A \Rightarrow B$).


Spanning trees

Let $G=(V, E)$ be a graph.

A graph is a spanning subgraph of G if it has vertex set V .

A spanning tree is a spanning subgraph that is a tree.

Example



In purple, five spanning subgraphs of the graph in blue. Only the first, third and fourth ones are spanning trees.

Theorem

Every connected graph has a spanning tree.

Proof

Every connected graph has a connected spanning subgraph. To remove the cycles from it, delete one after the edges that are in cycles. Once there are 1 edge fewer than vertices, the graph will be a tree. ■

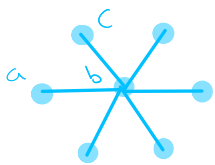
Distance in trees and graphs

5

If G has a uv -path, the distance between u and v , noted $d(u,v)$, is the smallest length of a uv -path. If G has no such path, $d(u,v)=\infty$. The diameter of G , $\text{diam}(G)$, is the maximum distance between two vertices.

The eccentricity of a vertex u is the distance to the furthest vertex. The radius is the minimal eccentricity.

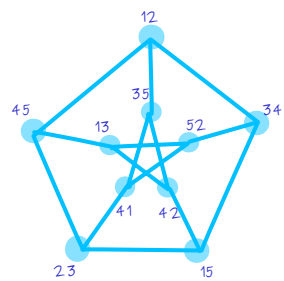
Example



Distance: $d(a,b)=d(b,c)=1$, $d(a,c)=2$

Diameter 2. A star always has radius 1, since the central vertex has eccentricity 1. The diameter, for all graph, is the maximal eccentricity.

Example



The Petersen graph has radius and diameter 2.

Recall there is an edge between two vertices if they represent disjoint 2-sets of $\{1,2,3,4,5\}$.

If two vertices ij and jk are not adjacent, they must share an element (as sets). Then, lm is disjoint from ij and jk , so $ij-lm-jk$ is a path of length 2.

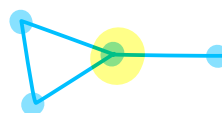
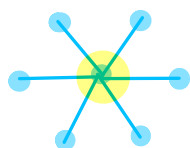
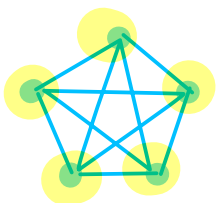
Here, $\{i,j,k,l,m\}$ represents $\{1,2,3,4,5\}$.

Theorem

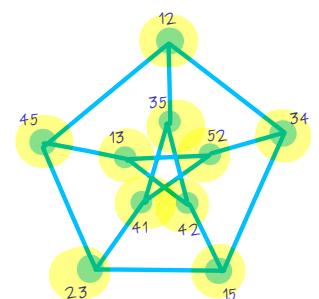
If G is a simple graph, $\text{diam}(G) \geq 3 \Rightarrow \text{diam}(\bar{G}) \leq 3$.

Proof: Read and understand as homework. In the book, that is Theorem 2.1.11, p.71.

The center of a graph is the induced subgraph with vertices of minimum eccentricity.



The Petersen graph and complete graph have center the whole graph. The star has, as center, only the central vertex.

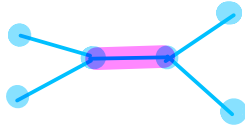


Theorem (Jordan, 1869)

6

The center of a tree is a vertex or an edge.

That means it cannot be a set of vertices, whenever the graph is a tree. Of course, the examples above show it is not true for graphs in general.



Reference: Douglas B. West. Introduction to graph theory, 2nd edition, 2001. Section 2.1